

**DELHI PUBLIC SCHOOL, RAIPUR**  
**TERMINAL ASSESMENT- I (2022-23) (MODEL PAPER)**

**SUBJECT: MATHS**

**DATE:** \_\_\_\_\_

**MARKS: 50**

**NAME:** \_\_\_\_\_ **CLASS:** I **SEC:** \_\_\_\_\_ **ROLL NO:** \_\_\_\_\_ **MARKS OBTAINED:** \_\_\_\_\_

**INVIGILATOR'S SIGN:** \_\_\_\_\_ **EXAMINER'S SIGN:** \_\_\_\_\_ **RECHECKER'S SIGN:** \_\_\_\_\_

**I. Answer the following.**

**(20x1=20)**

1) Write 49 in words. \_\_\_\_\_

2) Put the correct sign. (<, >, =)      12  1 more than 11

3) Carrot is an example of which solid shape? \_\_\_\_\_

4) In a balance scale the lighter side goes \_\_\_\_\_. (**up or down**)

5)  $10 - \square = 6$

6) How long is the object?



paper clips

7) Find the missing numbers using skip counting. **4, 6, 8,** \_\_\_\_\_ , \_\_\_\_\_

8) I am more than 13 and less than 18. I have 5 in my ones place. Who am I? \_\_\_\_\_

9) 30 lies between \_\_\_\_\_ and 31.

10)  $12 + \square = 15$

11) The value of 3 in the number **36** is \_\_\_\_\_

12) 2 boxes of ten balls each and 2 loose ones. How many balls? \_\_\_\_\_

13)  $5 + 6 = 10 + \underline{\hspace{1cm}}$

14) A rectangle has \_\_\_\_\_ sides and \_\_\_\_\_ corners.

15) 6 pens and 7 more pens = \_\_\_\_\_ pens in all.

16) I am just before 49. Which number am I? \_\_\_\_\_

17) \_\_\_\_\_ is 3 more than 13

18) 2 less than 18 is \_\_\_\_\_

19)  $23 - \underline{\hspace{1cm}} = 0$

20) Circle the **heaviest** one.



(Stapler)



(Brick)



(Pen)

**II. Solve**

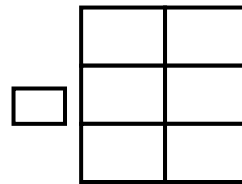
**(15x2=30)**

1) See the number in the box and answer the following. **39**

- i) It has \_\_\_\_\_ ones \_\_\_\_\_ tens
- iii) Its number name is \_\_\_\_\_
- ii) Number comes just before it is \_\_\_\_\_
- iv) Number comes just after it is \_\_\_\_\_

2) Raju has 6 biscuits and his mother gave him 8 more biscuits .How many biscuits does he have in all?

**Answer:** \_\_\_\_\_ biscuits.



3) Arrange the given number in increasing order.

48	44	4	24
----	----	---	----

 $\longrightarrow$  \_\_\_\_\_ , \_\_\_\_\_ , \_\_\_\_\_ , \_\_\_\_\_

4) Write the **name** of the **solid shape** which the following objects look like.



Globe \_\_\_\_\_



Dice \_\_\_\_\_

5) Write one addition and one subtraction statement with the answer



(a) Addition statement:  $\square + \square = 11$

(b) Subtraction statement:  $\square - \square = 11$

6) Solve using the given number line:

1	2	3	4	5	6	7	8	9	10	11	12	13	14	15	16	17
---	---	---	---	---	---	---	---	---	----	----	----	----	----	----	----	----

a)  $9 + 6 =$  \_\_\_\_\_

b)  $12 - 8 =$  \_\_\_\_\_

7) Fill in the blanks using the number family of **7, 8, and 15**

a)  $7 + \square = 15$

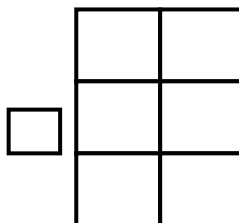
c)  $\square - 8 = 7$

b)  $8 + \square = 15$


d)  $15 - \square = 8$

8) There are 16 people in a bus. If 4 people get off, how many people are in the bus now?

**Answer:** \_\_\_\_\_ people in the bus now.



9) Identify the flat shape and write its name, number of sides and corners.




Name \_\_\_\_\_


Sides \_\_\_\_\_

Corners \_\_\_\_\_

10) If each glass holds 2 cups of milk, circle how many cups will fill 3 glasses.



=



= \_\_\_\_\_ cups

11) Solve the following.

(a)

	4
	6
+	8

(b)

	1	9
		7
-		

12) Fill in the missing part.

5	
8	

2	
10	

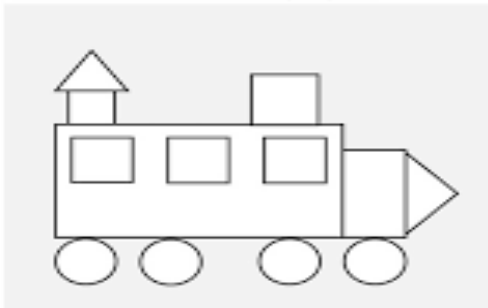
13) Look at the given letters and answer the following.

A P E O R S

i) Letters made of only straight lines.

ii) Letters made of both straight and curved lines.

14) Count and write the number of each shape:



<b>Square</b>	_____
<b>Rectangle</b>	_____
<b>Circle</b>	_____
<b>Triangle</b>	_____

15) The following picture gives the information of students of class 1A that how they came to school every day. See the picture carefully and answer the questions given below.

Walk							
Car							
Bike							
Bus							

- a) How many children walk to school? \_\_\_\_\_
- b) How many children came to school by bus? \_\_\_\_\_
- c) How many more children came by car than cycle? \_\_\_\_\_
- d) Which means of transport is used by 4 students only? \_\_\_\_\_