

DELHI PUBLIC SCHOOL, RAIPUR
TERMINAL ASSESMENT- II (2022-23) (MODEL PAPER)

SUBJECT: EVS

DATE: _____

MARKS: 50

NAME: _____ **CLASS:** I **SEC:** _____ **ROLL NO:** _____ **MARKS OBTAINED:** _____

INVIGILATOR'S SIGN: _____ **EXAMINER'S SIGN:** _____ **RECHECKER'S SIGN:** _____

I. Fill in the blanks:

(1×10=10)

1. Plants grow from _____.
2. Horse carriages are called _____.
3. We use a tubewell, hand pump or a well to get _____.
4. The Moon and stars give us _____ at night.
5. Farm and pet animals are called _____ animals.
6. Big plants having strong stems are called _____.
7. _____ is a special cream that protect our skin from sun rays.
8. Very small animals are called _____.
9. Climbers have _____ stem.
10. The _____ changes its shape every day.

II. Write whether the statements are true or false

(1×6=6)

1. Some plants are carnivorous. _____
2. The moon looks like a huge ball of fire. _____
3. Domestic animals live in jungle. _____
4. The water in seas and oceans is salty. _____
5. Boat and steamers are used in rivers. _____
6. During summer the Sun shines very brightly. _____

III. Name the following:

(1×6=6)

1. Animal that gives us wool _____
2. Plants that grow with the support of other plant _____
3. It looks like a huge ball of fire and gives us heat and light _____

4. In this season we wear woollen clothes and snowfall occurs _____



5. A means of air transport _____

6. Plants grown by a farmer for any use _____



IV. Identify the following pictures: -

(1x6=6)

a. Classify the following as herbs, shrubs, climber, creeper



b. Classify the following as farm animals, pet animals and wild animals



V. Answer the following questions: -

(2x8=16)

1. What are herbs? Give two examples ?

2. Which animal help us to carry loads?

3. What is season?

4. What are pet animals? Give two examples

5. Write any two uses of water?

6. Why are camels called "Ship of the desert"?

7. Name two things we get from plants?

8. Name the three main seasons.

VI. Draw and label:

(3x2=6)

1. Draw any two things we use in winter season

--	--

2. Draw and label means of transport .

Land Transport

Water Transport

--	--